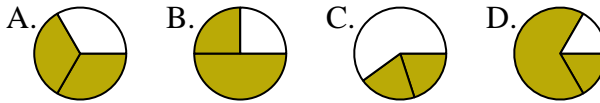




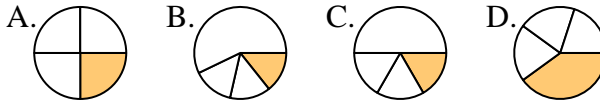
Determine which letter best represents each fraction.

**Answers**

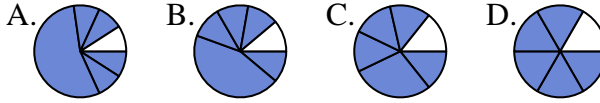
1) Which choice best represents  $\frac{2}{3}$ ?



2) Which choice best represents  $\frac{1}{4}$ ?



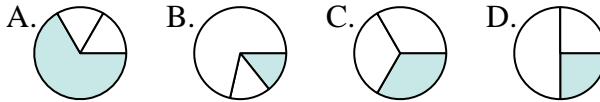
3) Which choice best represents  $\frac{5}{6}$ ?



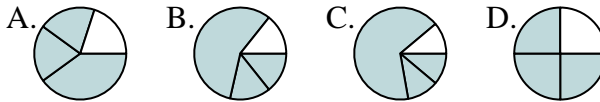
4) Which choice best represents  $\frac{3}{8}$ ?



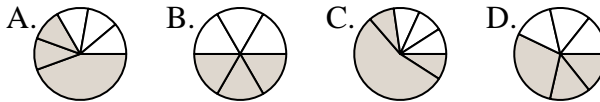
5) Which choice best represents  $\frac{1}{3}$ ?



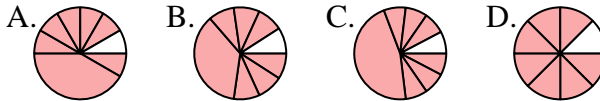
6) Which choice best represents  $\frac{3}{4}$ ?



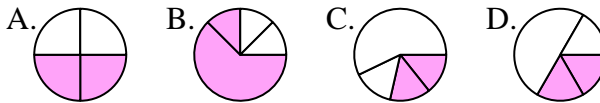
7) Which choice best represents  $\frac{3}{6}$ ?



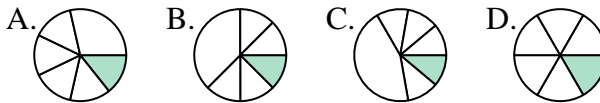
8) Which choice best represents  $\frac{7}{8}$ ?



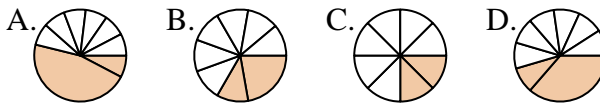
9) Which choice best represents  $\frac{2}{4}$ ?



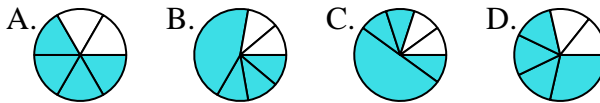
10) Which choice best represents  $\frac{1}{6}$ ?



11) Which choice best represents  $\frac{2}{8}$ ?



12) Which choice best represents  $\frac{4}{6}$ ?



1. \_\_\_\_\_

2. \_\_\_\_\_

3. \_\_\_\_\_

4. \_\_\_\_\_

5. \_\_\_\_\_

6. \_\_\_\_\_

7. \_\_\_\_\_

8. \_\_\_\_\_

9. \_\_\_\_\_

10. \_\_\_\_\_

11. \_\_\_\_\_

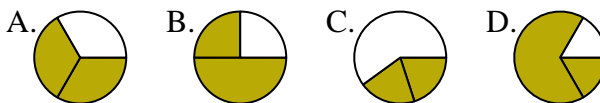
12. \_\_\_\_\_



Determine which letter best represents each fraction.

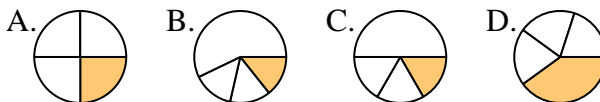
**Answers**

1) Which choice best represents  $\frac{2}{3}$ ?



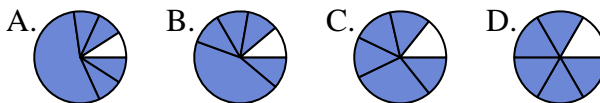
1.   **A**  

2) Which choice best represents  $\frac{1}{4}$ ?



2.   **A**  

3) Which choice best represents  $\frac{5}{6}$ ?



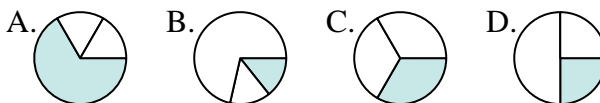
3.   **D**  

4) Which choice best represents  $\frac{3}{8}$ ?



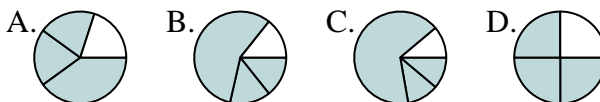
4.   **D**  

5) Which choice best represents  $\frac{1}{3}$ ?



5.   **C**  

6) Which choice best represents  $\frac{3}{4}$ ?



6.   **D**  

7) Which choice best represents  $\frac{3}{6}$ ?



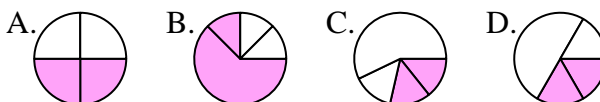
7.   **B**  

8) Which choice best represents  $\frac{7}{8}$ ?



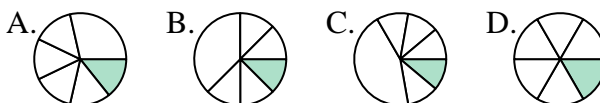
8.   **D**  

9) Which choice best represents  $\frac{2}{4}$ ?



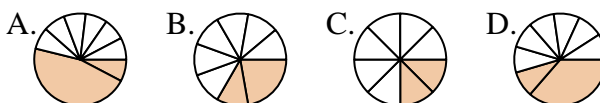
9.   **A**  

10) Which choice best represents  $\frac{1}{6}$ ?



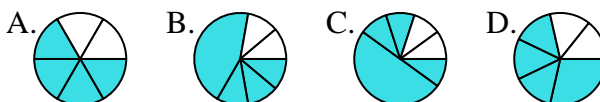
10.   **D**  

11) Which choice best represents  $\frac{2}{8}$ ?



11.   **C**  

12) Which choice best represents  $\frac{4}{6}$ ?



12.   **A**